

Materials for assessing adult numeracy



1

How many people are in the queue? Write your answer in the box.



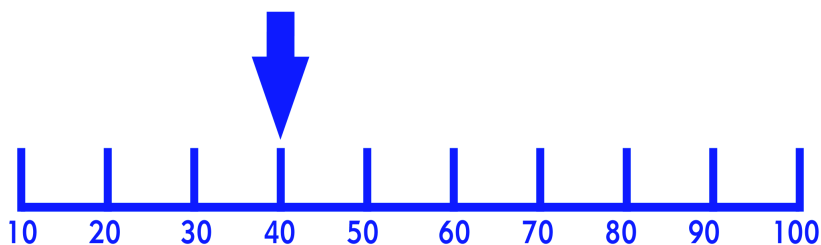
2

How much money is there altogether?
Write your answer in the box.



3

Count on thirty from the pointer. What number do you get to?
Write your answer in the box.



4

Write in the missing number.

12 14

18 20 22

5 Circle the largest number.

0 67 17 24 71 12

6 Write down the number that comes after 61.

7 The letters are sorted into odd numbers and even numbers.

Tick the correct pile for this letter.



8 If you put two of these number cards next to each other, you can make a number less than 25. Write the number in the box.

2

4

6

9 If you put two of these number cards next to each other, you can make a number more than 40. Write the number in the box.

0

3

4

10

Tick the coin that is closest in value to 48 pence.










11

You need to hang up all the mugs. Write down how many packs of hooks you need to buy.

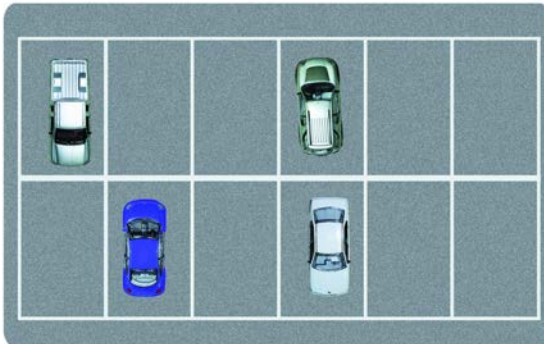


TOTAL

1 Put in the sign to make this sum correct.

+	-	5 3 = 15
÷	×	

2 There are 4 cars in the car park. There are spaces for 8 more. How many cars can be parked altogether? Tick the sum that you would use to answer this question.



$8 - 4 = \square$

$4 + 8 = \square$

$4 \times 8 = \square$

3 Write in the answer to this sum.

$15 + 11 = \square$

4 Write in the missing number.

$46 + \square = 56$

5 Write in the answer to this sum.

$$\begin{array}{r} 24 \\ + 16 \\ \hline \square \end{array}$$

6

Write in the answer to this sum.

$$20 - 8 = \boxed{}$$

7

Write in the missing number.

$$35 - \boxed{} = 20$$

8

Write in the answer to this sum.

$$\begin{array}{r} 87 \\ - 24 \\ \hline \boxed{} \end{array}$$

9


What is the total cost of these 2 things?



10

This person scored 13 out of 20 in a quiz.

How many did he get wrong?



TOTAL

1

Write in the answer to this sum.

$$2 \times 8 = \square$$

2

Write in the missing number to this sum.

$$5 \times \square = 20$$

3

Write in the missing number.

$$3 \times 3 = 3 + \square + 3$$

4

How many stamps are there altogether in these three stamp books?
Write the answer in the box.



5

Tick the sum that does **not** make 8.

$$2 \times 4 = \square$$

$$4 \times 2 = \square$$

$$8 \times 1 = \square$$

$$3 \times 5 = \square$$

6

How many tablets are taken every day?
Write your answer in the box.



7

Write in the missing number.

$$3 \times 4 = 6 \times \text{[]}$$

8

Double this number and write down the answer.

$$7 \text{ []}$$

TOTAL

1

Circle the quarter.

1

$\frac{1}{2}$

2

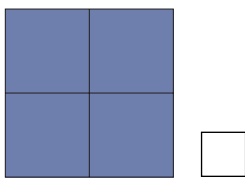
$\frac{1}{4}$

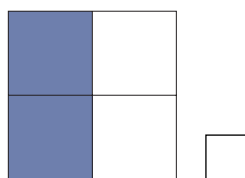
2

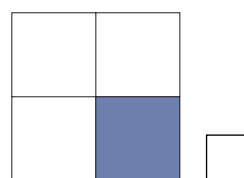
Write half as a fraction.

3

Tick the shape that shows a quarter.

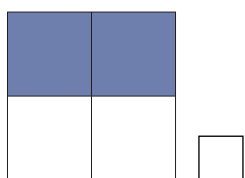


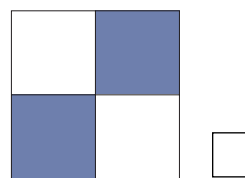


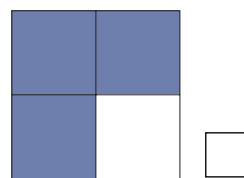


4

Tick the shape that does **NOT** show a half.







5

There are 10 players to be divided into 2 equal teams.

How many in each team?



There are players in each team.

6

Halve this number and write down the answer.

12

7

These people eat a quarter of the chocolate each.

How many pieces do they each eat?



Each person eats pieces of chocolate.

TOTAL

*Call your tutor before you do this task.

1

Use your calculator to check these sums. Tick yes if the sum is correct.
Tick no if the sum is incorrect.

$$9 \times 7 = 63$$

yes no

2

$$6 \times 8 = 56$$

yes no

3

$$32 + 61 = 39$$

yes no

4

$$7 \times 9 = 16$$

yes no

TOTAL

1

Tick the boxes to show the coins that make 65 pence.













2

Tick the set of coins that makes £1.







3

Is this enough money to pay? Tick yes or no.



yes

no

4

Are these amounts the same as each other? Tick yes or no.



yes

no

5

What is the total cost of the three cans of beans?



Total cost of the beans is

6

How much change will you get from £1?

Write your answer in the box.



7

How much change will you get from £20?

Write your answer in the box.



Change from £20

£

8

You buy 2 stamps.
How much change
will you get from £1?



Change from £1

p

TOTAL

1 Circle the 21st March 2002.

21/03/02
 21/04/02
 21/10/02
 21/09/02

2 Tick the date that is **NOT** the 26th November 2002.

26/11/02
 26th November 2002
 02/06/02
 26 Nov 02


3 Tick the display that shows the same time as the clockface.










4 Tick the clock that says nine forty-five.








5


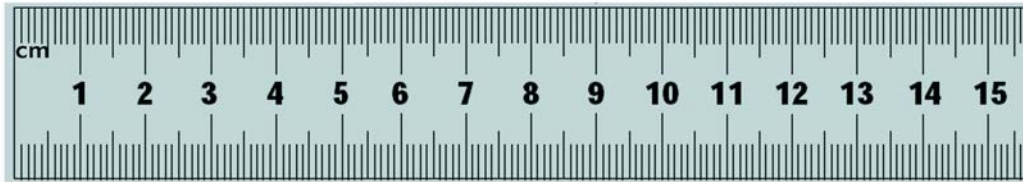
The time is quarter past eleven in the morning.
Write the time in numbers on the digital clock.



TOTAL

1

The pencil is 14 centimetres long. Mark this on the ruler.



2



How many centimetres in a metre? Tick the correct answer.

1 metre = 50cm

1 metre = 10cm

1 metre = 100cm

3

How long do you think this string is? Put a circle round the nearest measurement.



5cm

10cm

15cm

2cm

4

Jack is 90cm tall.
Is he tall enough to
go on this ride?

Tick yes or no.

yes

no



5

What do these letters mean?

Tick the correct answer.

kg

kilometres

kilograms

kilowatts

6

How heavy is the parcel?

Write your answer in the
box.



7

How much does the bottle hold?

Tick the correct answer.

2 centimetres

2 kilograms

2 litres

2 metres



8

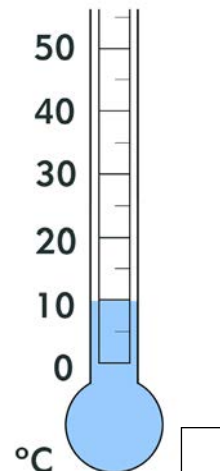
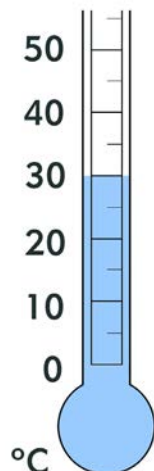
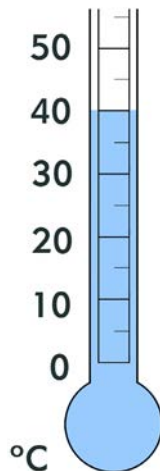
How many times can you fill the jug to the top from the milk container?

Write your answer in the box.



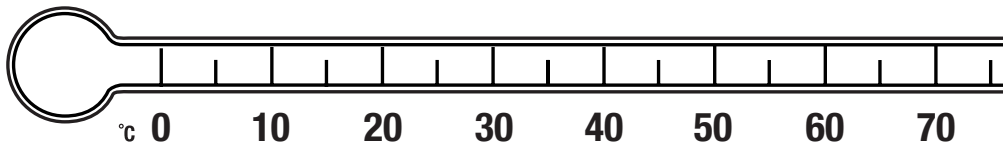
9

Tick the coolest temperature.



10

Put an arrow to show twenty degrees on the thermometer.



11

Write down the speed of the car in miles per hour.


mph



TOTAL

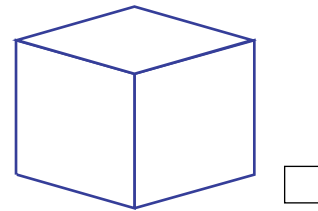
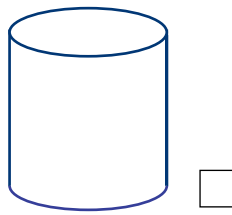
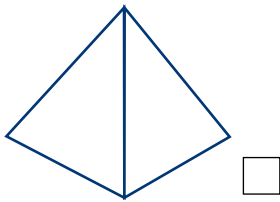
1

Tick the sign that has the shape of a circle.



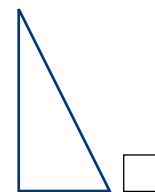
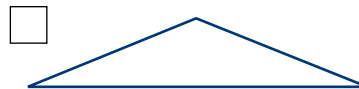
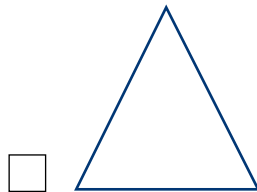
2

Tick the pyramid.




3

Tick the shape that is **not** a triangle.



4

Tick the name for these shapes. Are they circles, triangles, rectangles or squares?



Circles

Rectangles

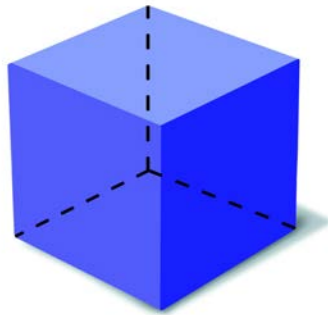
Triangles

Squares

5

How many faces does a cube have?

Write the answer in the box.



faces

6

Look at the picture.

Circle the object that is on the left of the computer.



7

How many side roads are on the right of the High Street?

Write the answer in the box.

roads



TOTAL

1 Write down the price for pie and chips.

£ CUT PRICE CAFE £

Fish and chips	£3.20	Cup of tea	£0.60
Sausage and chips	£1.90	Pot of tea	£1.00
Pie and chips	£2.50	Coffee	£0.90
Burger and chips	£1.30	Soft drinks	£0.70
Sandwiches:			
ham, cheese, beef, salad	£1.20		
Salad: ham, cheese, egg	£1.50		
Portion of chips	£0.70		

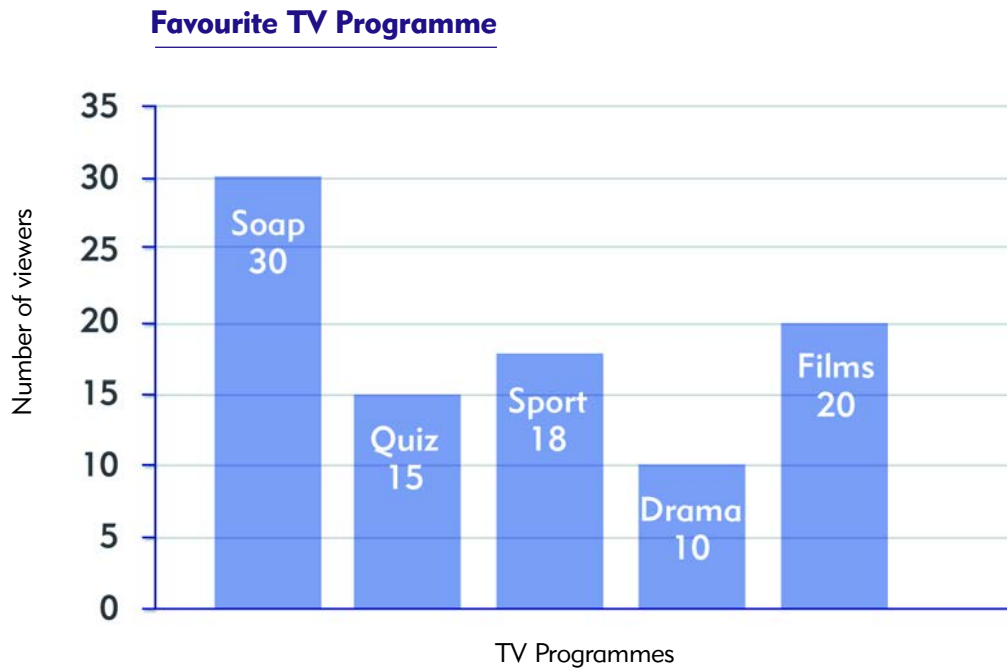
£

2 What day of the week is May the sixth?

- Monday
- Tuesday
- Wednesday
- Thursday
- Friday
- Saturday
- Sunday

May						
Sun	Mon	Tues	Wed	Thurs	Fri	Sat
			1	2	3	4
5	6	7	8	9	10	11
12	13	14	15	16	17	18
19	20	21	22	23	24	25
26	27	28	29	30	31	

Some people were asked to name their favourite type of TV programme.



3

Tick the box that shows the type of programme most people chose as their favourite.

Soap

Drama

Quiz

Films

Sport

4

How many people chose sport as their favourite programme?
Write your answer in the box.

people like to watch sport.

5

Tick all the women who are **less than 25 years old**.



Age: 21



42



19



26



23

TOTAL

1

Four children were asked how much TV they watch each week.

A block graph has been made from their answers. Ben's answer still needs to be put in the graph.

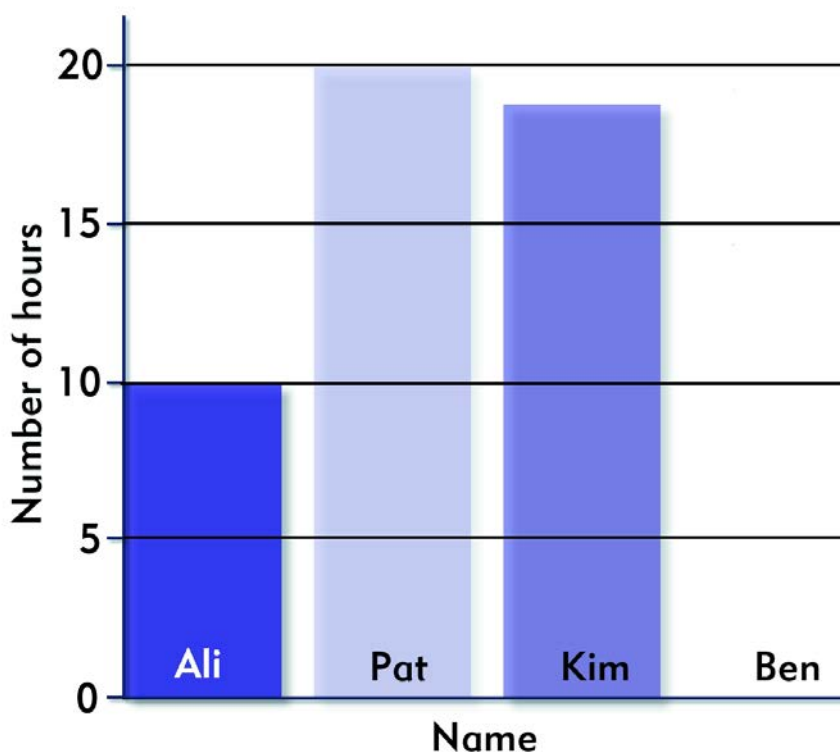
Draw a block on the graph to show how many hours of TV Ben watches.

Ali: I watch 10 hours a week.

Pat: I watch 20 hours a week.

Kim: I watch 18 hours a week.

Ben: I watch 15 hours a week.



2

This is a stores list. The headings are missing.

Write this heading in the correct place on the stores list.

Boxes

3

There were 10 boxes in the stores on Thursday. Write the missing information in the correct space on the stores list.

Stores	
Monday	4
Tuesday	
Wednesday	6
Thursday	
Friday	18
Saturday	
Sunday	

TOTAL



department for
education and skills
creating opportunity, releasing potential, achieving excellence